
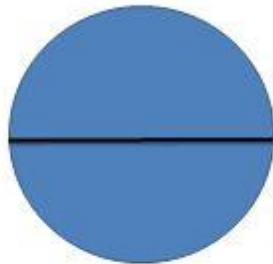


# Circles

$$\pi = 3.14$$



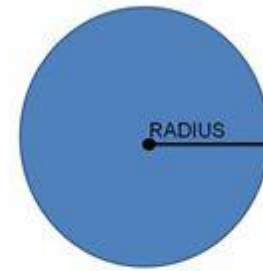
## Diameter



To find the circumference when you have the diameter:

$$C = \pi \times d$$

## Radius



To find the circumference when you have the radius:

$$C = 2 \times \pi \times r$$